

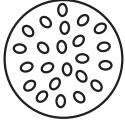
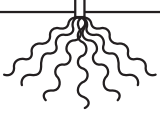


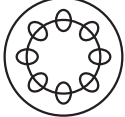
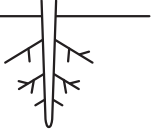


図表の整理

植物のなかま(1)

クラス _____ 氏名 _____

◆被子植物の分類

子葉	(葉)葉脈	茎の断面(維管束)	根
 (子葉が1枚) ① <input type="text"/>	 ② <input type="text"/>	 ③ <input type="text"/>	 ④ <input type="text"/>
 (子葉が2枚) ⑤ <input type="text"/>	 ⑥ <input type="text"/>	 ⑦ <input type="text"/>	 ⑧ <input type="text"/>

Blank lined area for student answers.